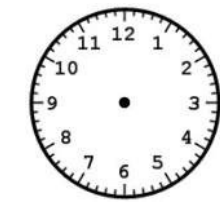
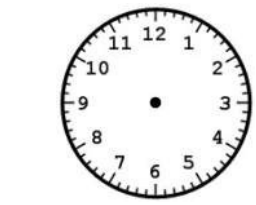


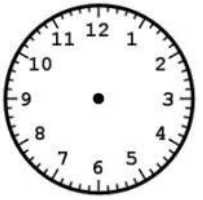
What's the time, please?



It's ten o'clock.



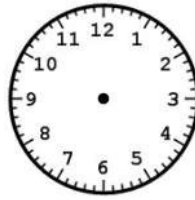
It's half past nine



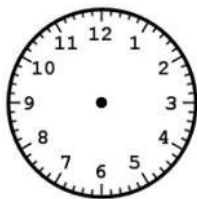
It's half past eleven.



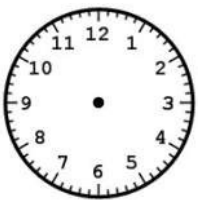
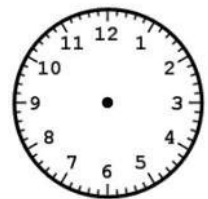
It's two o'clock.



It's seven o'clock.



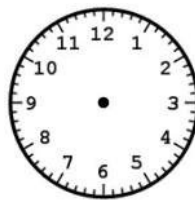
It's half past five



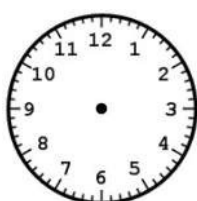
It's half past eight.



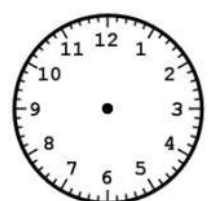
It's eleven o'clock.



It's twelve o'clock.



It's half past six





Analogue



Digital

Time Match

1:00

Twelve
o'clock

One
o'clock

2:30

Quarter
past seven

Half past
eight

12:00

8:30

Half past
two

7:15

Quarter to
three

Quarter to
seven

10:00

2:45

Ten
o'clock

6:45

Quarter
past ten

Half past
eight

8:30

10:15

Quarter
past two

3:45

Quarter
to one

Quarter
to four

2:15

12.45